

## Finishes Questions



**Beech spoon**




**Melamine spoon**

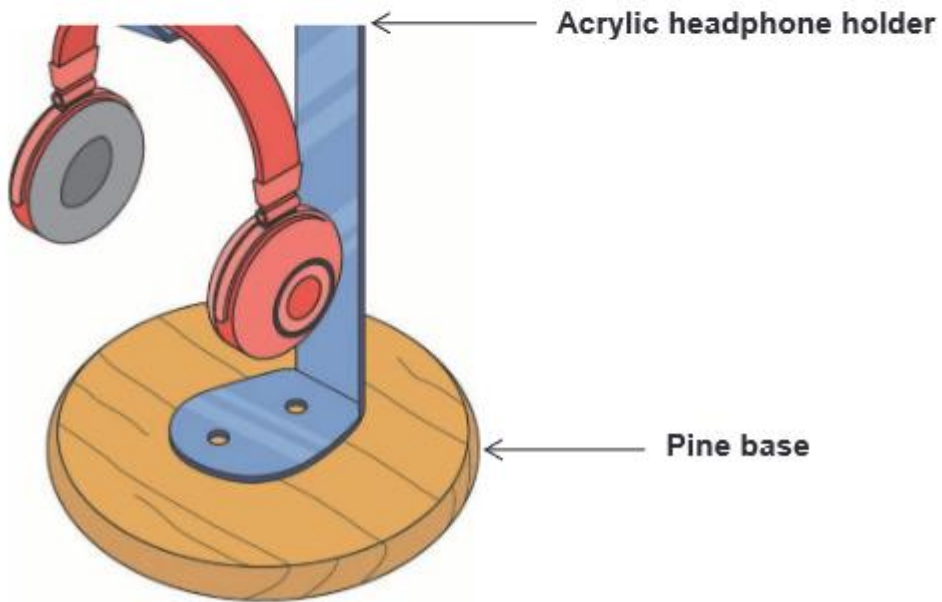
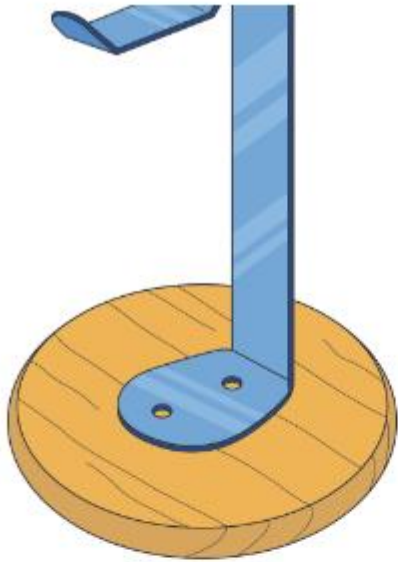


**Stainless steel ladle**


1. Explain why a finish has not been applied to the kitchen utensils (3)
2. Name the adhesive you would use to glue acrylic numbers onto a wooden clock face and explain why you have chosen this adhesive (2)
3. Using notes and sketches describe the process of gluing the numbers to the wooden clock face (5)
4. Complete the table (8)




Fastening	Full name	Function
	Washer	Spreads the pressure and protects the surface of the material
	Bolt	
		

5. Give a use for each of the following adhesives and give two advantages and two disadvantages. (8)
  - Polyvinyl acetate (PVA)
  - Cyanoacrylate (Super Glue)
6. Use notes and sketches to show how you would glue two materials together using epoxy resin (5)
7. Name a suitable finish for a pine table (1)
8. Give two reasons for choosing this finish (2)
9. Name a suitable finish for a mild steel coat hook (1)
10. Use notes and sketches to describe how you would apply the finish (6)
11. Explain why a mild steel coat hook needs a finish (4)



12. Use notes and sketches to clearly show how you would fix the acrylic headphone holders to the pine bases.  
Name all the tools and equipment you would use (3)
13. Complete the table (4)

Component	Name
	

14. Explain why a furniture manufacturer would buy pre manufactured components rather than make them (4)